



## **2021 PRIMARY 3 WEIGHTED ASSESSMENT 1**

Name: \_\_\_\_\_ (    )      Date: 10 May 2021

Class: Primary 3

Duration: 1 hour

Parent's Signature: \_\_\_\_\_      Marks: \_\_\_\_\_ / **15**

# **MATHEMATICS**

### **INSTRUCTIONS TO CANDIDATES**

1. Write your name, class and register number.
2. Do not turn over this page until you are told to do so.
3. Follow all instructions carefully.
4. Answer all questions.
5. The duration for paper is 1 hour.



## Section A

### **Short Answer Questions**

Questions 1 to 10 carry 1 mark each. Write your answers in the boxes provided. For questions which require units, give your answers in the units stated. [5 marks]

1. What digit does  represent?

1	2	9	4
+ 6	☆	3	1
<hr/>			
7	5	2	5

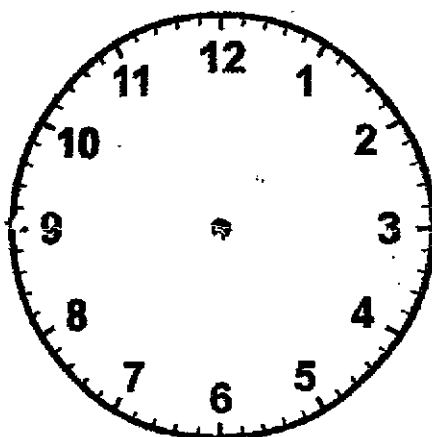
\_\_\_\_\_

- 2. Arrange the fractions from the smallest to the greatest.**

$$\frac{3}{9}, \frac{1}{9}, \frac{4}{9}$$

**smallest**

3. Draw the missing hands on the clock to show 9.30.



4. Look at the picture given.  
The bottle of milk contains \_\_\_\_\_  $\ell$  of milk.

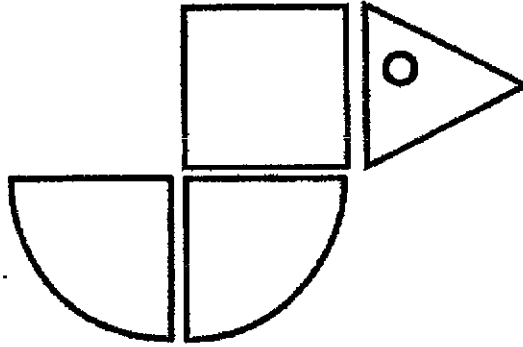


1  $\ell$  of milk



	$\ell$
--	--------

5. Colour the quarter circles in the figure below.



**Section B**Questions 6 to 10 carry **2 marks** each.

Show all your workings and statements clearly.

[10 marks]

- 
6. There are 20 apples and bananas altogether.  
There are 4 times as many apples as bananas.  
How many bananas are there?

There are \_\_\_\_\_ bananas.

Ans : \_\_\_\_\_

---

7. A pair of socks costs \$8.  
A shirt costs \$20 more than a pair of socks.  
How much does **2 such shirts** cost?

The 2 shirts cost \$\_\_\_\_\_.

Ans : \$ \_\_\_\_\_

---

8. Sam is 170 cm tall.  
Betty is 12 cm shorter than Sam.  
Daniel is 6 cm taller than Betty.  
What is Daniel's height?

Daniel is \_\_\_\_\_ cm tall.

Ans : \_\_\_\_\_ cm

---

9. Kelly and Mandy had the same number of stamps. After Mandy gave Kelly 5 stamps, the number of stamps Kelly had became 30.  
How many stamps did Kelly and Mandy have altogether at first?












Kelly and Mandy had \_\_\_\_\_ stamps altogether.

Ans: \_\_\_\_\_

---

10. The picture graph shows the number of children at the library who borrowed books.

Each of them borrowed only 1 book.

Books Borrowed by Children	
Comics	  
Fairy Tales	
Fantasy	   
Non-fiction	 
Each  stands for 3 children.	

There were 50 children who visited the library.  
How many children **did not** borrow any books?

\_\_\_\_\_ children did not borrow any books.

Ans: \_\_\_\_\_

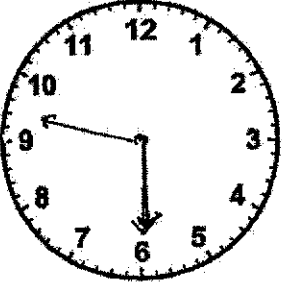
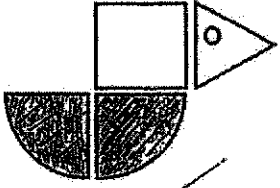
**End of Paper**



## ANSWER KEY

**YEAR : 2021**  
**LEVEL : Primary 3**  
**SCHOOL : Tao Nan School**  
**SUBJECT : MATHEMATICS**  
**TERM : Weighted Assessment 1**

### Weighted Assessment 1

Q1	$5-1-2=2$	Q2	$\frac{1}{9}, \frac{3}{9}, \frac{4}{9}$
Q3		Q4	$6 \div 2 = 3$ $3 \times 1 = 3$
Q5		Q6	$20 \div 5 = 4$
Q7	$20+8=28$ $28+28=56$	Q8	$170-12=158$ $158+6=164$
Q9	$30-5=25$ $25+25=50$	Q10	$9+3+12+6=30$ $50-30=20$

